

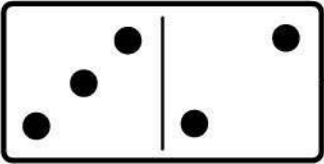











Name _____

Date _____

Matching Dominos

Count the dots in each set of Dominos and write it down in the box beside it.

Match the dominos that has equal amounts of dots.

<input type="text"/>			<input type="text"/>
<input type="text"/>			<input type="text"/>
<input type="text"/>			<input type="text"/>
<input type="text"/>			<input type="text"/>
<input type="text"/>			<input type="text"/>
<input type="text"/>			<input type="text"/>

A dashed line connects the first domino on the left (3 and 2 dots) to the second domino on the right (4 and 1 dots).